

Name: \_\_\_\_\_

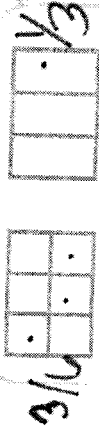
Date: \_\_\_\_\_

# Week 16. Day 1

Jacob gets paid \$7 each time he washes the car. He washes the car 4 times in January. How much money did he earn for washing the car in January?  $7 \times 4 = 28$

\$28

Jacob gets paid \$7 each time he washes the car. He wants to save up money to buy a video game. So far he has \$14. The game costs \$42. How many more times does he have to wash the car in order to have enough money to pay of the video game?



Compare the fractions.

$\frac{1}{2} > \frac{3}{6}$

Fix the 3 Errors: the girl is a gracefull dancer.

The girl graceful

Trace the letter l.

Practice.

James drove 358 miles to get to Georgia. Phillip drove 187 miles to get to Georgia. How many more miles did James have to travel than Phillip?

$358 - 187 = 171$

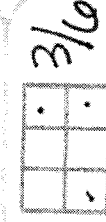
Jacob needs to wash the car 4 more times.

Sophia cut a pizza into eight slices. How much pizza is left? ate 3/8



Sophia has 5/8 pizza left.

James drove 358 miles to get to Georgia. Phillip drove 187 miles to get to Georgia. Estimate to the nearest ten to find out about how many more miles James traveled than Phillip.



What fraction of the rectangle is shaded?

$\frac{3}{10}$

$\frac{2}{3}$

$\frac{4}{3}$

$\frac{6}{3}$

$\frac{10}{3}$



Write the fractions below in the correct boxes above.

$\frac{4}{3}$

$\frac{6}{3}$

$\frac{3}{3}$

$\frac{3}{3}$

A prefix is a word part that is added at the beginning of a word. It changes the meaning of the word.

Irregular plural nouns are nouns that you do not add -s or -es to make plural. Make the following nouns plural.

- 1. woman → 1. women
- 2. child → 2. children
- 3. life → 3. lives

dis not, opposite

Word	Meaning
disagree	
disapprove	

Name: \_\_\_\_\_ Date: 1/5/1 Week 16. Day 2

Madison takes 24 counters from a bag. She then puts an equal number of 6 counters into each of 4 groups. How many counters are in each group?

$24 \div 6 = 4$   
 $6, 12, 18, 24$   
4 groups

Nicholas' third grade class raised \$467. Andrew's fourth grade class raised \$278. Estimate to the nearest ten to find about how much money they raised altogether.

$467 \rightarrow 470$   
 $278 \rightarrow 280$   
750  
 They raised about \$750.

Madison takes 24 counters from a bag. She then gives her partner, Nathan, 8 counters. Madison puts an equal number of her remaining counters into each of 4 groups. How many counters does Madison have in each group?

$24 - 8 = 16$   
 $16 \div 4 = 4$   
4

Nicholas' third grade class raised \$467 during the frozen food fundraiser. Andrew's fourth grade class raised \$278. How much more did Nicholas' class raise than Andrew's class?

$467 - 278 = 189$   
189

Madison has 3 counters in each group.

$3 \times 3 = 9$   
 $3/3$

Sophia cut a pizza into eights. She ate two slices of pieces. She says there's only 2 fourths left. Is she correct? Explain...

Sophia She is wrong.  
 $2/8$  There are  $3/4$  left.

Compare the fractions.

$2/6 = 1/3$

Write the fractions below in the correct boxes above.

$1/3$   $2/3$   $3/3$

Fix the 3 Errors: Amazon has A variety of book online?

a variety of books.

A prefix is a word part that is added at the beginning of a word. It changes the meaning of the word.

dis not opposite

Trace the letter l.

Irregular plural nouns are nouns that you do not add -s or -es to make plural. Make the following nouns plural.

1. man → 1. men  
 2. mouse → 2. mice  
 3. tooth → 3. teeth

Practice.

Word	Meaning
disconnect	
dishonest	

Name: \_\_\_\_\_ Date: \_\_\_\_\_

Week 16 . Day 3

Tyler buys 3 large boxes of pretzels.

(8) (8) (8)

Each large box has 8 pretzels. How many  $3 \times 8 =$

Tyler has (24) pretzels.

Who bought more pretzels?

Tyler buys 3 large boxes with 8 pretzels in each box.


(8) (8) (8) Tyler = 24

Olivia buys 6 small boxes with 3 pretzels in each box.

(3) (3) (3) (3) (3) (3) Olivia = 18

Who bought more pretzels?

Tyler bought more pretzels.



Compare the fractions.

Thank you  $\frac{5}{8} > \frac{2}{4}$  half

Sophia cut a pizza into eights. When she was done eating, there were five slices left. What is greater, the amount she ate or the amount she left? Explain...



left:  $\frac{5}{8}$   
ate:  $\frac{3}{8}$

She had more left 0 b/c  $\frac{5}{8}$  is greater than  $\frac{3}{8}$ .

Fix the 3 Errors: It's impossible for pigs to fly.

impossible to fly

she ate 3/8

Net-Movies has 4,265 movies available for viewing online.


4,265

Block-Movies has 624 movies more than Net-Movies. How many movies does Block-Movies have online?

4,889

Who bought more pretzels?

3.NF.2



What fraction of the rectangle is shaded?

$\frac{4}{4}$    $\frac{1}{2}$    $\frac{4}{6}$

$\frac{4}{8}$

$\frac{1}{4}$



Write the fractions below in the correct boxes above.

$\frac{1}{4}$   $\frac{3}{4}$   $\frac{5}{4}$   $\frac{2}{4}$

3.NF.2

A prefix is a word part that is added at the beginning of a word. It changes the meaning of the word.

Irregular plural nouns are nouns that you do not add -s or -es to make plural. Make the following nouns plural.

- goose → 1. geese
- deer → 2. deer
- mouse → 3. mice

Mis: bad, wrong

Word	Meaning
misbehave	
misspell	

Henry made 4 triangles using toothpicks. He used 1 toothpick per side. How many toothpicks did he use to make the 4 triangles?  
 $4 \times 3 = 12$   
 Henry used 12 toothpicks.

Henry made 9 triangles using toothpicks. Kathy made 5 squares. They both used 1 toothpick for each side. Who used more toothpicks? How many more did they use?  
 $9 \times 3 = 27$   
 $5 \times 4 = 20$   
 Henry used more toothpicks.  
 He use 7 more than Kathy.

Compare the fractions.

$\frac{3}{8} < \frac{2}{4}$

$\frac{5}{8} > \frac{1}{4}$

$\frac{1}{2} > \frac{1}{4}$

Sophia cut a pizza into eighths. She ate one fourth. Her friend ate three eighths. Who ate more? Draw a picture to prove your answer.

Sophia  $\frac{1}{4}$  Friend  $\frac{3}{8}$

Cool Books Online had 5,307 books online for viewing. Books A Thousand had 8,608 books online for viewing. How many more books does Books A Thousand have than Cool Books Online?

8,608  
 $- 5,307$   
 3,301

What fraction of the rectangle is shaded?

$\frac{1}{2}$    $\frac{6}{8}$    $\frac{2}{8}$

Write the fractions below in the correct boxes above.

$\frac{1}{4}$   $\frac{2}{4}$

Cool Books Online has 5,307 books online for viewing. Books A Thousand has 8,608 books online for viewing. Round to the nearest 100 to find how many more books Books A Thousand has than Cool Books Online.

8,608  $\rightarrow$  8,600  
 5,307  $\rightarrow$  5,300  
 $\times$  5,300

Fix the 3 Errors: Biographies tell you fact about a persons life.  
 facts persons

A prefix is a word part that is added at the beginning of a word. It changes the meaning of the word.

Irregular plural nouns are nouns that you do not add -s or -es to make plural. Make the following nouns plural.

1. knife  $\rightarrow$  1. knives

2. foot  $\rightarrow$  2. feet

3. sheep  $\rightarrow$  3. sheep

Word	Meaning
mismatch	
misfortune	

mis: bad, wrong

Name: \_\_\_\_\_

Date: \_\_\_\_\_

# Week 16 . Day 5

Kathy made 8 squares using toothpicks. She used 1 toothpick per side. How many toothpicks did she use to make the 8 squares?

$$8 \times 4 = 32$$

32 toothpicks

Kathy has 56 toothpicks. She wants to use them to make squares. She uses 1 toothpick per side. How many squares can she make with all 56 toothpicks?

$$56 \div 4 = 14$$

4 x 14 = 56


She can make 14 squares.

MyTunes has 5,641 songs online for download. AllTunes has 6,970 songs online for download. How many songs do they have altogether for download?

$$\begin{array}{r} 5,641 \\ + 6,970 \\ \hline 12,611 \end{array}$$

MyTunes has 5,641 songs online for download. AllTunes has 6,970 songs online for download. Round to the nearest 100 to find out how many songs they have altogether.

$$\begin{array}{r} 5,641 \rightarrow 5,600 \\ 6,970 \rightarrow 7,000 \\ \hline 12,600 \end{array}$$



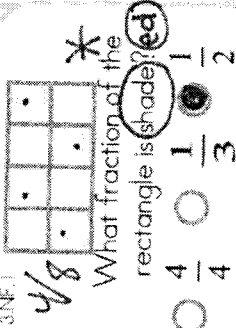
Compare the fractions.

$$\frac{1}{2} = \frac{2}{4} < \frac{3}{4}$$

Sophia cut a pizza into eighths. She ate one fourth. Her friend ate one half. Who ate more? Draw a picture to prove your answer.



$\frac{1}{2} = \frac{4}{8}$  Her friend ate more.  
 $\frac{1}{4} = \frac{2}{8}$  Sophia



What fraction of the rectangle is shaded?  $\frac{1}{4}$

$\frac{3}{4}$

$\frac{1}{4}$

$\frac{2}{4}$

Write the fractions below in the correct boxes above.

$\frac{6}{4}$   $\frac{2}{2}$

Fix the 3 Errors: A prefix goes at the beginning of the word.

goes of word

of see the table

Irregular plural nouns are nouns that you do not add -s or -es to make plural. Make the following nouns plural.

- woman → 1. women
- child → 2. children
- fish → 3. fish

A prefix is a word part that is added at the beginning of a word. It changes the meaning of the word.

uni: not

Word	Meaning
unhappy	
unsure	