

Name: \_\_\_\_\_

Date: \_\_\_\_\_

# Week 5. Day 1

Danny has 5 baggies with 4 marbles in each baggie. He gives away 3 baggies. How many marbles did he give away?

4 4 4 4 4  
3 baggies  
 $3 \times 4 = 12$   
Danny gives away 12 marbles.

Amy has 30 apples. She fills 5 bags with an equal amount of apples in each bag, how many apples are inside each bag?

$30 \div 5 = 6$   
5, 10, 15, 20, 25, 30  
There are 6 apples in each bag.

67	70
198	200
294	290

Round to Nearest 10

148	100
847	800
370	400

Round to Nearest 100

Add a subject: went to the grocery store.

Solve: 4 groups of 6 = 24  
 $6 \times 6 = 12$   
 $6 \times 6 = 12$   
 $\frac{6}{24} = \frac{12}{24}$

Solve: 4 groups of 7 =  
 $7 \times 7 = 14$   
 $7 \times 7 = 14$   
 $\frac{7}{28} = \frac{14}{28}$

1st: Round to Nearest 100  
2nd: Add.  
 $457 + 500 = 957$   
 $680 + 700 = 1380$

Trace the letter a.





Practice: \_\_\_\_\_

@learningwithmiss.com

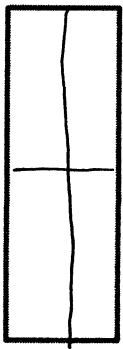
A noun is a person, place, thing, or idea. Circle all the nouns.

apple Computer school  
todd fireman television  
mom run laughed

A fraction is a number on a number line.



Partition the following rectangle into fourths.



Partition the following rectangle into thirds.



List 3 nouns.

1. \_\_\_\_\_
2. \_\_\_\_\_
3. \_\_\_\_\_