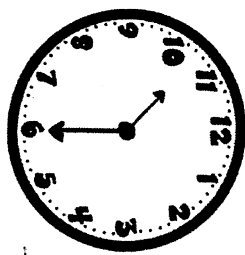


Name: \_\_\_\_\_


Date: \_\_\_\_\_

Week 5. Day 2



The clock shows the time Jillian started her quiz. If it takes her 20 minutes to finish the quiz, what time will she finish?

10:30      10:30      10:40      10:50  
 10:30      10:40      10:50      \* 10:50



Write the time: \_\_\_\_\_  
 Add 15 minutes: \_\_\_\_\_

Add. Did you find any friendly numbers?  
 420  
 + 570

Bubble in the shapes that are quadrilaterals (have 4 sides).  
 square      rectangle      triangle

- circle
- rhombus
- trapezoid

Which sides are parallel?  
 A and C  
 D and C

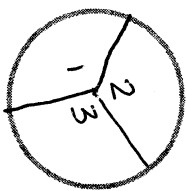


Partition the following circle into halves.  
 400      20      990  
 500      70      990  
 900 + 90

Tina printed 12 pictures. She will add four pages to her scrapbook and place an equal number of pictures on each page. How many pictures will there be on each page?

12 ÷ 4 = 3  
 There will be 3 pictures on each page.

Partition the following circle in to thirds.



Add a subject: lives close to Disney World.

Trace the letter a.



Practice.

A noun is a person, place, thing, or idea. Circle all the nouns.

**bootle**

truck

grawl

bink

apologize

student

ask

alligator

city

List 3 nouns.

1. \_\_\_\_\_
2. \_\_\_\_\_
3. \_\_\_\_\_