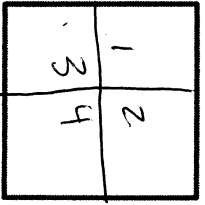


Name: \_\_\_\_\_

Date: \_\_\_\_\_

Week 5, Day 3


Partition the following square into fourths.



1st way

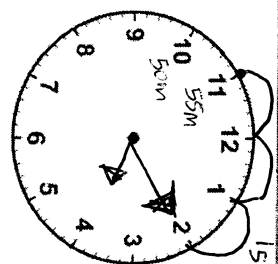


3rd way

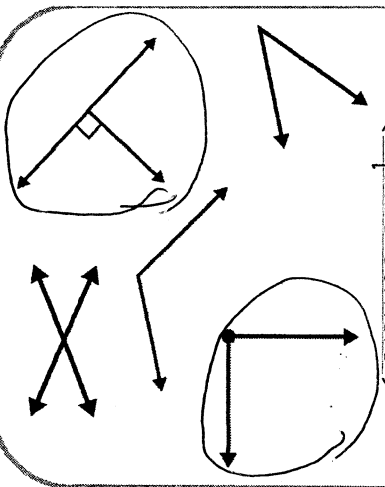


2nd way


The numerator of a fraction tells you what we are counting. The denominator tells you how many pieces are in the whole.  
Amy eats  $\frac{1}{2}$  of an apple. How many pieces was the apple cut into?  
The apple was cut into 2 pieces.



Circle all the right angles. (square corners.)




What do all 3 shapes have in common?



All 3 shapes are triangles. They have 3 straight lines. They are polygons.

Circle all of the quadrilaterals (4-sided shapes).



Add a subject: swam in the ocean.

Trace

swam in the ocean

Practice. \_\_\_\_\_

© Learning with a Miss.com

A noun is a person, place, thing, or idea. Circle all the nouns.

Africa

Sell

Wal-Mart

love

bear

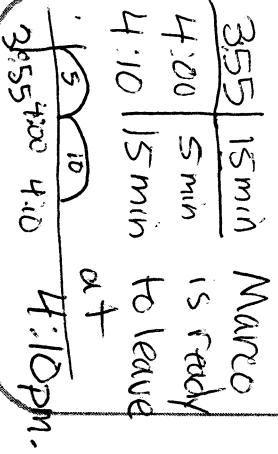
Zoo

teacher pick

List 3 nouns.

- 1. \_\_\_\_\_
2. \_\_\_\_\_
3. \_\_\_\_\_

Marco starts getting ready for soccer practice at 3:55 P.M. If it takes him 15 minutes to get ready, what time is he ready to leave?



Write A.M. or P.M.

You eat breakfast at 7:30 AM.

You go to soccer practice at 4:00 PM.