

Name: \_\_\_\_\_

Date: \_\_\_\_\_

Week 6. Day 1

Amy has 18 brownies and wants an equal number of brownies in each of 6 bags. How many brownies will be in each bag?

$18 \div 6 = 3$   
There will be 3 brownies in each bag.

Richie has 25 cookies. He puts the cookies in bags. Each bag has 5 cookies. How many bags does he have?


$25 \div 5 = 5$   
Richie has 5 bags.  
5, 10, 15, 20, 25

Round to the nearest 10, then add.

$678 \rightarrow 670$   
 $+ 527 \rightarrow + 530$   
1200

Round to the nearest 100, then add.

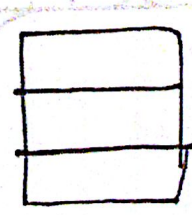
$678 \rightarrow 700$   
 $+ 527 \rightarrow + 500$   
1200



Add a predicate: Amy

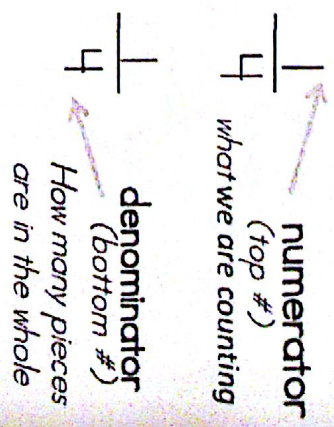
... likes to play soccer after school.

Write equal or unequal on the space provided.



Brenda cut her sandwich into three pieces. She ate one third of her sandwich. Draw a picture of how her sandwich looked before she ate it.


A fraction is a number on a number line.



Trace



Practice.




A verb shows action. Circle all the verbs.



mom



happy



teacher

teacher

List 3 verbs.

- 1. \_\_\_\_\_
- 2. \_\_\_\_\_
- 3. \_\_\_\_\_